

Centre Number	Candidate Number	Name
---------------	------------------	------

UNIVERSITY OF CAMBRIDGE INTERNATIONAL EXAMINATIONS
General Certificate of Education Ordinary Level

GEOGRAPHY

2217/02

Paper 2

October/November 2005

INSERT

2 hours 15 minutes

READ THESE INSTRUCTIONS FIRST

This insert contains Fig. 1 for Question 2, Photograph A for Question 3 and the Photograph and all tables and Figs for Questions 8 and 9.

Write your Centre number, candidate number and name in the spaces provided and attach it to your answer paper/answer booklet.

This document consists of **6** printed pages and **2** blank pages.



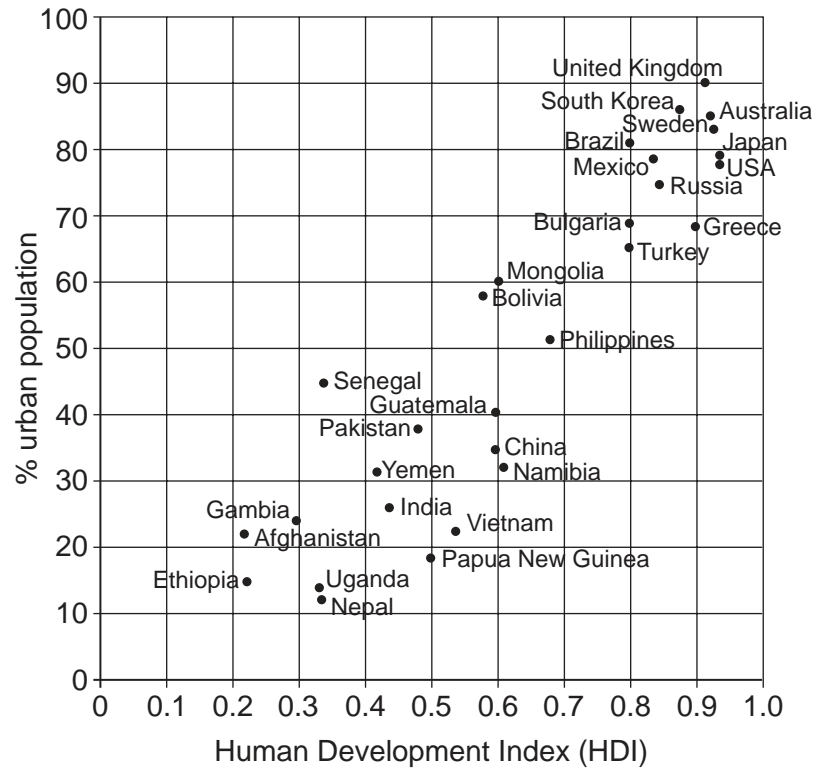


Fig. 1 for Question 2



Photograph A for Question 3

The diagram shows a forest, which is found in regions close to the The tallest trees, called rise above the remainder of the in an attempt to gain more There is very little in these forests because the forest is and very little light reaches ground level.

Statement for Question 4

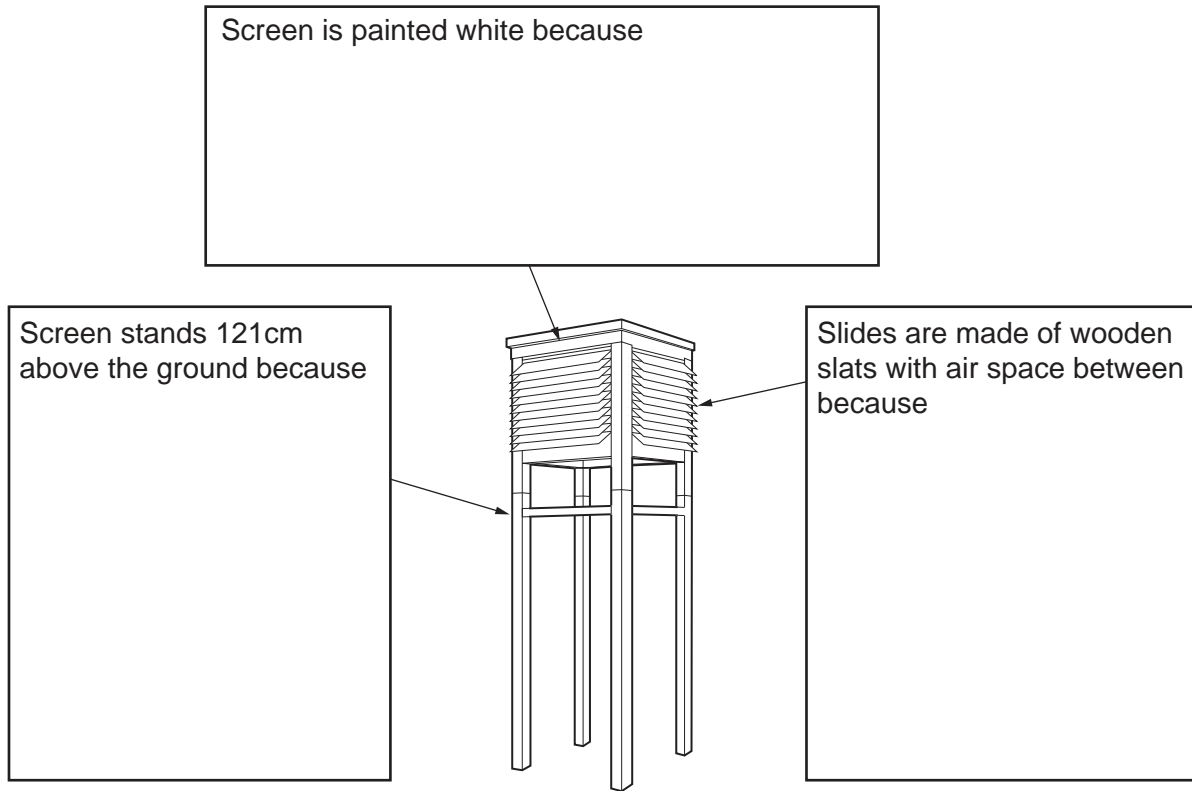


Fig. 6 for Question 8

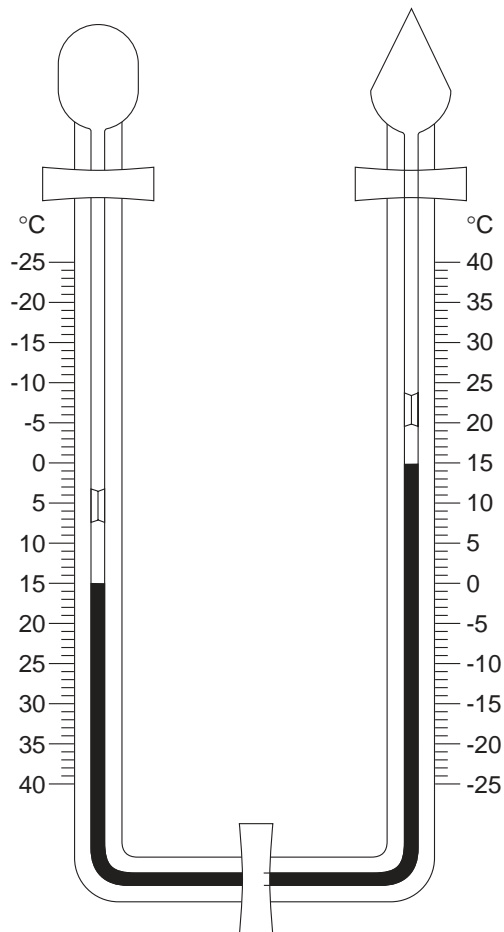


Fig. 7 for Question 8

Table 1

	Monday	Tuesday	Wednesday	Thursday	Friday	Saturday	Sunday
Max. temperature (°C)	24	26	31	34	25	26	24
Min. temperature (°C)	14	15	18	18	18	15	12
Average daily December temperature (°C)	19	20.5		26	21.5	20.5	18
Average daily July temperature (°C)	13	11	13	11	12.5	13	12.5

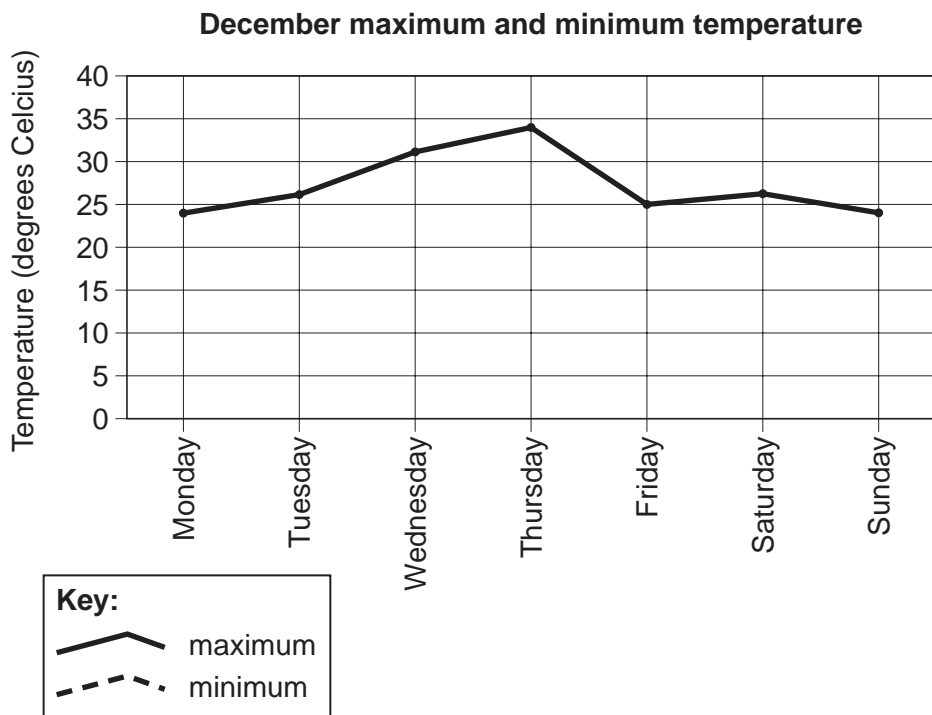


Fig. 8 for Question 8



Photograph B for Question 9

Table 2

Bi-polar scoring system

Negative variables	-2	-1	0	+1	+2	Positive variables
Dirty from litter						Clear from litter
Noisy						Quiet
Unmaintained roads and pavements						Well maintained roads and pavements
Crowded						Few people
Unattractive						Attractive

		Area A	Area B	
Variables of the survey	1	Litter	-2	+2
	2	Noise	-2	+1
	3	Maintenance	0	0
	4	People	-1	0
	5	Attraction	-1	+2
		Total	-6	+5

Table 3

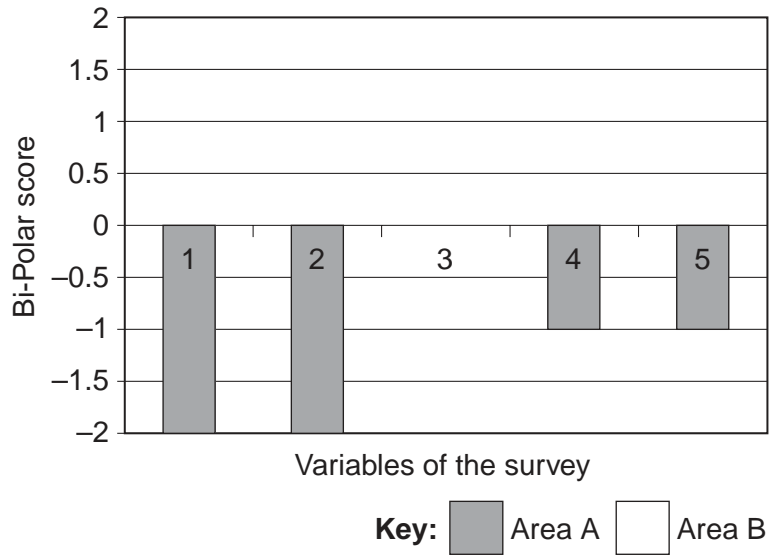


Fig. 9 for Question 9

Table 4

Use of building	Hotels or Hostels	Selling food	Clothes shops	Craft or souvenir shops	Offices or Banks	Public Buildings	Other
Number of buildings	6	13	18	8	5	7	11

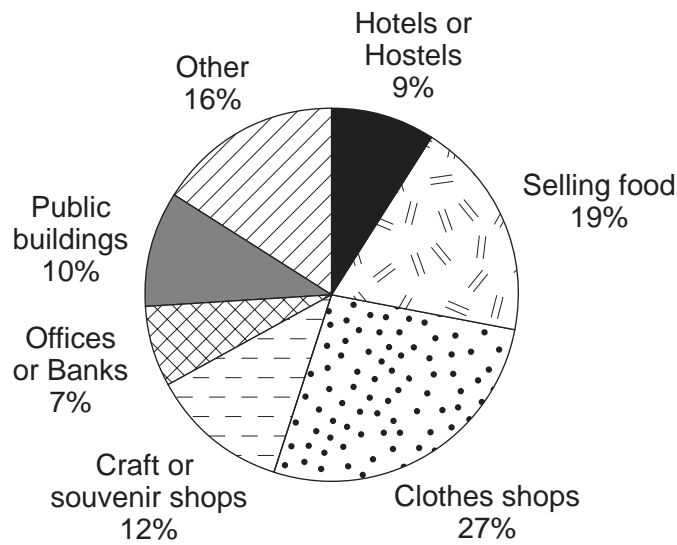


Fig. 10 for Question 9

Copyright Acknowledgements:

Question 2 Fig. 1; M Witherick; *The Urban World*; © Nelson Thornes, 1999.

Question 3 Photograph A; Brian Heppell © UCLES.

Permission to reproduce items where third-party owned material protected by copyright is included has been sought and cleared where possible. Every reasonable effort has been made by the publisher (UCLES) to trace copyright holders, but if any items requiring clearance have unwittingly been included, the publisher will be pleased to make amends at the earliest possible opportunity.

University of Cambridge International Examinations is part of the University of Cambridge Local Examinations Syndicate (UCLES), which is itself a department of the University of Cambridge.